

Budha Dal Public School, Patiala

First Term Examination (Sept. 2024)

Subject – **EVS**

Set – **A**

M.M. – **60**

Time – **2:30 hrs.**

Name –

Roll No :

Class & Sec. – **1-**

Section A

Multiple Choice Question

5 Marks

1. I am a non-living thing. You wear me on your feet. What am I? []

(A) Shirt



(B) Cap



(C) Spectacles



(D) Shoes



2. I am a non-living thing. You use me to play. What am I? []

(A) Comb



(B) Spoon



(C) Pencil



(D) Bat




3. Choose the living thing from the following : []

(A)



(B)



(C)



(D)



4. Choose the non-living thing from the following : []

(A)



(B)



(C)



(D)



5. I am the main source of water. Who am I ?

[]

Write

(A) Sea



(B) Pond



(C) River



(D) Rain



Section B

Very Short Answer Questions

23 Marks

6. Name the living things shown in the pictures.

(A)



(B)



7. Name the non -living things in the pictures.

(A)



(B)



8. Name the plant part given in the image.



9. Which plant is stronger : rose or basil ?

(A)



(B)





Write True/false

10. Teeth help us to see. _____
11. Mouth holds all our body parts together. _____
12. Living things grow. _____
13. Living things give birth to young ones. _____
14. Herbs are tall and big plants. _____
15. Shrubs are bigger than trees. _____
16. A money plant needs support to grow. _____
17. Roots make food for the plant. _____
18. River water is salty. _____
19. Lake water is the main source of water. _____

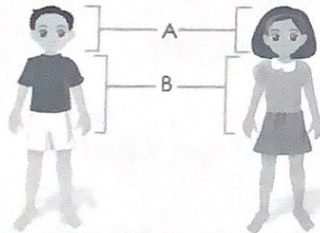
Fill in the blanks using correct words from the brackets.

20. _____ are our arms and legs. (Trunk / Limbs)
21. _____ is the middle part of the body. (Head / Trunk)
22. _____ help us to chew food. (Eyes / Teeth)
23. _____ and oceans have large amount of water. (River / Sea)
24. _____ is not present in fresh water. (Germs / Salt)
25. _____ makes food for the plant. (Stem / Leaf)
26. _____ fixes the plant to the ground. (Root / Flower)


27. Choose the correct words from the brackets and complete the following table (well/sea/ocean/natural/artificial)

Sources of water	
	<p>This is a <input type="text"/> . It is a <input type="text"/></p> <p><input type="text"/> source of water.</p>
	<p>This is a <input type="text"/> . It is an <input type="text"/></p> <p><input type="text"/> source of water.</p>

28. Write the names of the parts of the body labelled as A and B in the given picture.

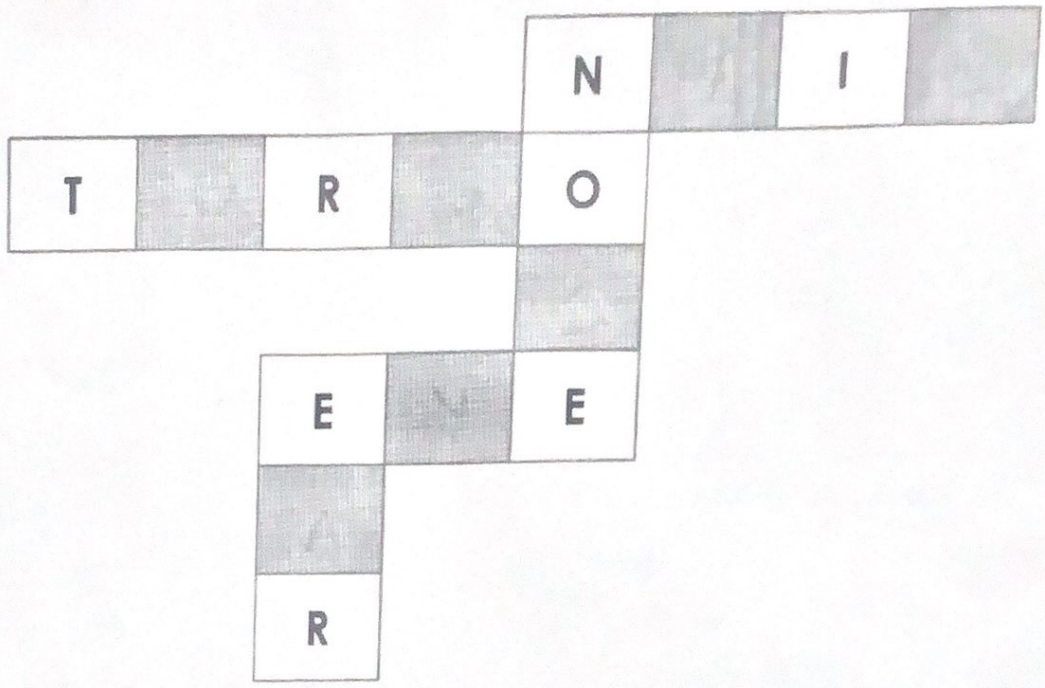


29. Label the different parts of the plant.



30

30. Fill in the boxes to complete the names of the body parts




Section D	Question/Answer	16 Marks
31. What are trees?	<div> <div></div> <div></div> <div></div> <div></div> <div></div> <div></div> <div></div> <div></div> </div>	
32. Name two natural sources of water.	<div> <div></div> <div></div> <div></div> <div></div> </div>	
33. Name two herbs.	<div> <div></div> <div></div> <div></div> <div></div> </div>	
34. Write any two uses of water.	<div> <div></div> <div></div> <div></div> <div></div> </div>	

35. Name any two parts of the head.

36. You eat leafy vegetables in your meals. What types of plants are they?

37. Name any two trees.

38. Look at the pictures below. On which one can a tree house be built? Why?



Banyan Tree



Rose Plant
